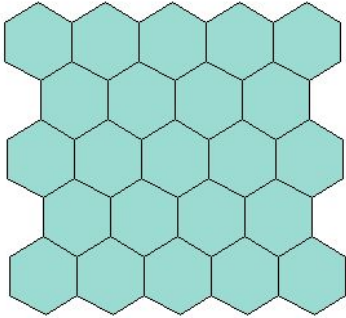




1. Is this a tessellation?




2. Is this a tessellation?



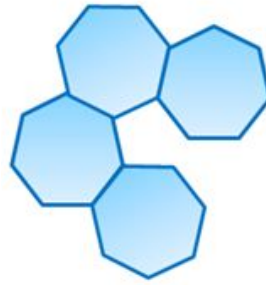
3. Is this a tessellation?



4. Is this a tessellation?



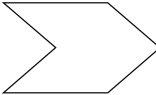
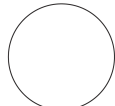
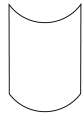
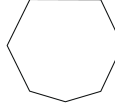
5. Is this a tessellation?



6. Which of these is true of all tessellations?

- a. Only one shape
- b. Repeating shapes
- c. No gaps between the shapes
- d. Shapes overlap

7. Which of the following shapes will tessellate?

- a. 
- b. 
- c. 
- d. 

8. Where might you see a tessellation?

- a. Bottom of sneakers
- b. Brick wall
- c. Sidewalk
- d. Honeycomb

Answers:

1. Yes
2. No
3. Yes
4. Yes
5. No
6. B, C
7. A, C
8. A, B, C, D